

TEST PAPER

KVPY-2019

Date : 03-11-2019

Time Allowed: 3 Hrs.

Maximum Marks: 160

KISHORE VAIGYANIK PROTSAHAN YOJANA STREAM (SB/SX)

INSTRUCTIONS FOR MARKING ON ANSWER SHEET

1. Immediately fill the particulars on this page of the Test Booklet with Blue / Black Ball Point Pen. Use of pencil is strictly prohibited.
2. The Test Booklet consists of **120** questions.
3. There are Two parts in the question paper. The distribution of marks subjectwise in each part is as under for each correct response.

MARKING SCHEME :

PART-I

MATHEMATICS

Question No. **1 to 20** consist of **ONE (1)** mark for each correct response.

PHYSICS

Question No. **21 to 40** consist of **ONE (1)** mark for each correct response.

CHEMISTRY

Question No. **41 to 60** consist of **ONE (1)** mark for each correct response.

BIOLOGY

Question No. **61 to 80** consist of **ONE (1)** mark for each correct response.

PART-II

MATHEMATICS

Question No. **81 to 90** consist of **TWO (2)** marks for each correct response.

PHYSICS

Question No. **91 to 100** consist of **TWO (2)** marks for each correct response.

CHEMISTRY

Question No. **101 to 110** consist of **TWO (2)** marks for each correct response.

BIOLOGY

Question No. **111 to 120** consist of **TWO (2)** marks for each correct response.

4. Candidates will be awarded marks as stated above in Instructions No. 3 for correct response of each question. For Part-I **0.25** marks will be deducted for indicating incorrect response of each question and for Part-II **0.50** marks will be deducted for indicating incorrect response of each question. No deduction from the total score will be made if no response is indicated for an item in the Answer sheet.
5. No candidate is allowed to carry any textual material, printed or written, bits of papers, paper, mobile phone, any electronic device, etc., except the Admit Card inside the examination hall/room.
6. Rough work is to be done on the space provided for this purpose in the Test Booklet only. This space is given at the bottom of each page.
7. On completion of the test, the candidate must hand over the Answer Sheet to the Invigilator on duty in the Room/Hall. However, the candidates are allowed to take away this Test Booklet with them.
8. Do not fold or make any stray marks on the Answer Sheet.

 **Target PMT**
EXCLUSIVELY FOR MEDICAL ENTRANCE

HEAD OFFICE

A-1/169, Main Najafgarh Road, Janakpuri, New Delhi-110058 Phone : 011-41024601-04

E-mail : info@targetpmt.in Website : www.targetpmt.in

PART-I

One Mark Questions

MATHEMATICS

Choose the correct (✓) answer:

- The number of four-letter words that can be formed with letters a, b, c such that all three letters occur is
 - 30
 - 36
 - 81
 - 256
- Let $A = \left\{ \theta \in \mathbb{R} : \left(\frac{1}{3} \sin(\theta) + \frac{2}{3} \cos(\theta) \right)^2 = \frac{1}{3} \sin^2(\theta) + \frac{2}{3} \cos^2(\theta) \right\}$
Then
 - $A \cap [0, \pi]$ is an empty set
 - $A \cap [0, \pi]$ has exactly one point
 - $A \cap [0, \pi]$ has exactly two points
 - $A \cap [0, \pi]$ has more than two points
- The area of the region bounded by the lines $x = 1$, $x = 2$, and the curves $x(y - e^x) = \sin x$ and $2xy = 2\sin x + x^3$ is
 - $e^2 - e - \frac{1}{6}$
 - $e^2 - e - \frac{7}{6}$
 - $e^2 - e + \frac{1}{6}$
 - $e^2 - e + \frac{7}{6}$
- Let AB be a line segment with midpoint C, and D be the midpoint of AC. Let C_1 be the circle with diameter AB, and C_2 be the circle with diameter AC. Let E be a point of C_1 such that EC is perpendicular to AB. Let F be a point on C_2 such that DF is perpendicular to AB, and E and F lie on opposite sides of AB. Then the value of $\sin \angle FEC$ is
 - $\frac{1}{\sqrt{10}}$
 - $\frac{2}{\sqrt{10}}$
 - $\frac{1}{\sqrt{13}}$
 - $\frac{2}{\sqrt{13}}$
- The number of integers x satisfying $-3x^4 + \det \begin{bmatrix} 1 & x & x^2 \\ 1 & x^2 & x^4 \\ 1 & x^3 & x^6 \end{bmatrix} = 0$ is equal to
 - 1
 - 2
 - 5
 - 8
- Let P be a non-zero polynomial such that $P(1+x) = P(1-x)$ for all real x , and $P(1) = 0$. Let m be the largest integer such that $(x-1)^m$ divides $P(x)$ for all such $P(x)$. Then m equals
 - 1
 - 2
 - 3
 - 4
- Let $f(x) = \begin{cases} x \sin\left(\frac{1}{x}\right) & \text{when } x \neq 0 \\ 1 & \text{when } x = 0 \end{cases}$ and $A = \{x \in \mathbb{R} : f(x) = 1\}$.
Then A has
 - exactly one element
 - exactly two elements
 - exactly three elements
 - infinitely many elements
- Let S be subset of the plane defined by $S = \{(x, y) : |x| + 2|y| = 1\}$.
Then the radius of the smallest circle with centre at the origin and having non-empty intersection with S is
 - $\frac{1}{5}$
 - $\frac{1}{\sqrt{5}}$
 - $\frac{1}{2}$
 - $\frac{2}{\sqrt{5}}$

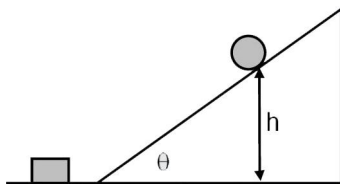
Space For Rough Work

9. The number of solutions of the equation $\sin(9x) + \sin(3x) = 0$ in the closed interval $[0, 2\pi]$ is
- (1) 7 (2) 13
(3) 19 (4) 25
10. Among all the parallelograms whose diagonals are 10 and 4, the one having maximum area has its perimeter lying in the interval
- (1) (19, 20] (2) (20, 21]
(3) (21, 22] (4) (22, 23]
11. The number of ordered pairs (a, b) of positive integers such that $\frac{2a-1}{b}$ and $\frac{2b-1}{a}$ are both integers is
- (1) 1 (2) 2
(3) 3 (4) more than 3
12. Let $z = x + iy$ and $w = u + iv$ be complex numbers on the unit circle such that $z^2 + w^2 = 1$. Then the number of ordered pairs (z, w) is
- (1) 0 (2) 4
(3) 8 (4) infinite
13. Let E denote the set of letters of the English alphabet, $V = \{a, e, i, o, u\}$, and C be the complement of V in E ; then the number of four-letter words (where repetitions of letters are allowed) having at least one letter from V and at least one letter from C is
- (1) 261870 (2) 3141260
(3) 425880 (4) 851760
14. Let $\sigma_1, \sigma_2, \sigma_3$ be planes passing through the origin. Assume that σ_1 is perpendicular to the vector $(1, 1, 1)$, σ_2 is perpendicular to a vector (a, b, c) , and σ_3 is perpendicular to the vector (a^2, b^2, c^2) . What are all the positive values of $a, b,$ and c so that $\sigma_1 \cap \sigma_2 \cap \sigma_3$ is a single point?
- (1) Any positive value of $a, b,$ and c other than 1
(2) Any positive values of a, b and c where either $a \neq b,$
 $b \neq c$ or $a \neq c$
- (3) Any three distinct positive values of $a, b,$ and c
(4) There exist no such positive real numbers $a, b,$ and c
15. Ravi and Rashmi are each holding 2 red cards and 2 black cards (all four red and all four black cards are identical). Ravi picks a card at random from Rashmi, and then Rashmi picks a card at random from Ravi. This process is repeated a second time. Let p be the probability that both have all 4 cards of the same colour. Then p satisfies
- (1) $p \leq 5\%$ (2) $5\% < p \leq 10\%$
(3) $10\% < p \leq 15\%$ (4) $15\% < p$
16. Let A_1, A_2 and A_3 be the regions on \mathbb{R}^2 defined by
- $$A_1 = \{(x, y) : x \geq 0, y \geq 0, 2x + 2y - x^2 - y^2 > 1 > x + y\}$$
- $$A_2 = \{(x, y) : x \geq 0, y \geq 0, x + y > 1 > x^2 + y^2\},$$
- $$A_3 = \{(x, y) : x \geq 0, y \geq 0, x + y > 1 > x^3 + y^3\}$$
- Denote by $|A_1|, |A_2|$ and $|A_3|$ the areas of the regions $A_1, A_2,$ and A_3 respectively. Then
- (1) $|A_1| > |A_2| > |A_3|$ (2) $|A_1| > |A_3| > |A_2|$
(3) $|A_1| = |A_2| < |A_3|$ (4) $|A_1| = |A_3| > |A_2|$
17. Let $f : \mathbb{R} \rightarrow \mathbb{R}$ be a continuous function such that $f(x^2) = f(x^3)$ for all $x \in \mathbb{R}$. Consider the following statements
- I. f is an odd function
II. f is an even function
III. f is differentiable everywhere
- Then
- (1) I is true and III is false (2) II is true and III is false
(3) both I and III are true (4) both II and III are true
18. Suppose a continuous function $f : [0, \infty) \rightarrow \mathbb{R}$ satisfies
- $$f(x) = \int_0^x t f(t) dt + 1 + 1 \text{ for all } x \geq 0. \text{ Then } f(1) \text{ equals}$$
- (1) e (2) e^2
(3) e^4 (4) e^6

19. Let $a > 0$, $a \neq 1$. Then the set S of all positive real numbers b satisfying $(1 + a^2)(1 + b^2) = 4ab$ is
- (1) an empty set
 - (2) a singleton set
 - (3) a finite set containing more than one element
 - (4) $(0, \infty)$
20. Let $f: \mathbb{R} \rightarrow \mathbb{R}$ be a function defined by
- $$f(x) = \begin{cases} \frac{\sin(x^2)}{x} & \text{if } x \neq 0 \\ 0 & \text{if } x = 0 \end{cases}$$
- Then, at $x = 0$, f is
- (1) not continuous
 - (2) continuous but not differentiable
 - (3) differentiable and the derivative is not continuous
 - (4) differentiable and the derivative is continuous

PHYSICS

21. In a muonic atom, a muon of mass of 200 times of that of electron and same charge is bound to the proton. The wavelengths of its Balmer series are in the range of :
- (1) X-rays
 - (2) infrared
 - (3) γ -rays
 - (4) Microwave
22. We consider the Thomson model of the hydrogen atom in which the proton charge is distributed uniformly over a spherical volume of radius 0.25 angstrom. Applying the Bohr condition in this model the ground state energy (in eV) of the electron will be close to
- (1) $-13.6/4$
 - (2) -13.6
 - (3) $-13.6/2$
 - (4) -2×13.6
23. A spherical rigid ball is released from rest and starts rolling down an inclined plane from height $h = 7$ m, as shown in the figure. It hits a block at rest on the horizontal plane (assume elastic collision). If the mass of both the ball and the block is m and the ball is rolling without sliding, then the speed of the block after collision is close to

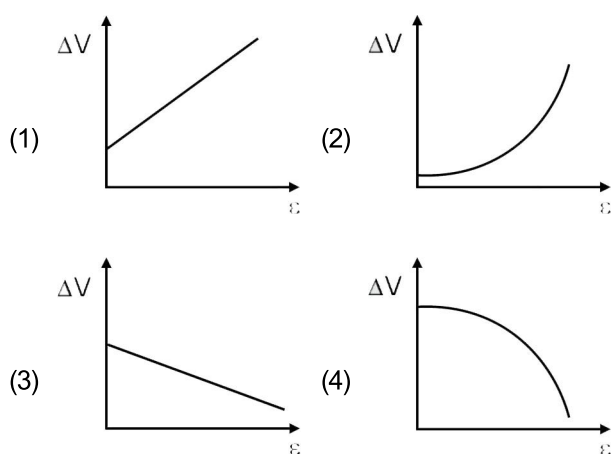
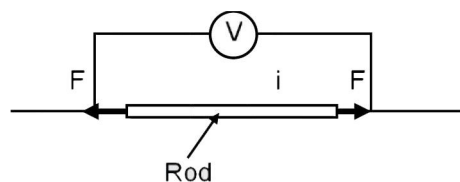


- (1) 6 m/s
- (2) 8 m/s
- (3) 10 m/s
- (4) 12 m/s

24. A girl drops an apple from the window of a train which is moving on a straight track with speed increasing with a constant rate. The trajectory of the falling apple as seen by the girls is :
- (1) parabolic and in the direction of the moving train.
 - (2) parabolic and opposite to the direction of the moving train
 - (3) an inclined straight line pointing in the direction of the moving train
 - (4) an inclined straight line pointing opposite to the direction of the moving train
25. A train is moving slowly at 2 m/s next to a railway platform. A man, 1.5 m tall, alights from the train such that his feet are fixed on the ground. Taking him to be a rigid body, the instantaneous angular velocity (in rad/sec) is
- (1) 1.5
 - (2) 2.0
 - (3) 2.5
 - (4) 3.0
26. A point mass M moving with a certain velocity collides with a stationary point mass $M/2$. The collision is elastic and in one dimension. Let the ratio of the final velocities of M and $M/2$ be x . The value of x is
- (1) 2
 - (2) 3
 - (3) $1/2$
 - (4) $1/4$

Space For Rough Work

27. A particle of mass $2/3$ kg with velocity $v = -15$ m/s at $t = -2$ s is acted upon by a force $f = k - \beta t^2$. Here $k = 8$ N and $\beta = 2$ N/s². The motion is one dimensional. Then the speed at which the particle acceleration is zero again, is
- (1) 1 m/s (2) 16 m/s
(3) 17 m/s (4) 32 m/s
28. A certain stellar body has radius $50 R_s$ and temperature $2T_s$ and is at a distance of 2×10^{10} A. U. from the earth. Here A.U. refers to the earth sun distance and R_s and T_s refer to the sun's radius and temperature respectively. Take both star and sun to be ideal black bodies. The ratio of the power received on earth from the stellar body as compared to that received from the sun is close to
- (1) 4×10^{-20} (2) 2×10^{-6}
(3) 10^{-8} (4) 10^{-16}
29. As shown in the schematic below, a rod of uniform cross-sectional area A and length ℓ is carrying a constant current i through it and voltage across the rod is measured using an ideal voltmeter. The rod is stretched by the application of a force F . Which of the following graphs would show the variation in the voltage across the rod as function of the strain, ϵ , when the strain is small. Neglect Joule heating.



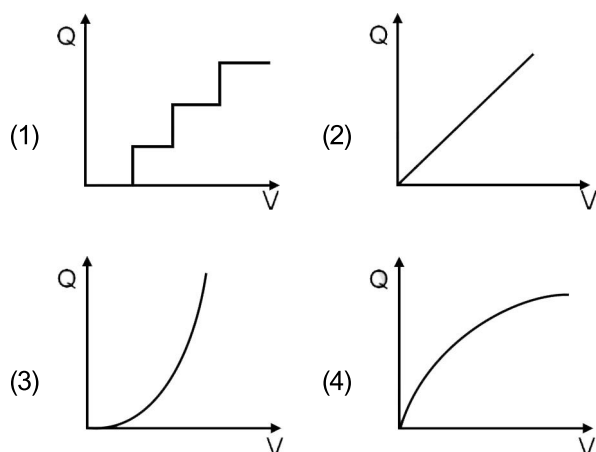
30. Two identical coherent sound sources R and S with frequency f are 5 m apart. An observer standing equidistant from the sources and at a perpendicular distance of 12 m from the line RS hears maximum sound intensity. When he moves parallel to RS the sound intensity varies and is a minimum when he comes directly in front of one of the two sources. Then a possible value of f is close to (the speed of sound is 330 m/s)
- (1) 495 Hz (2) 275 Hz
(3) 660 Hz (4) 330 Hz
31. A photon falls through a height of 1 km through the earth's gravitational field. To calculate the change in its frequency, take its mass to be $h\nu/c^2$. The fractional change in frequency ν is close to
- (1) 10^{-20} (2) 10^{-17}
(3) 10^{-13} (4) 10^{-10}
32. 0.02 moles of an ideal diatomic gas with initial temperature 20°C is compressed from 1500 cm³ to 500 m³. The thermodynamics process is such that $PV^2 = \beta$ where β is a constant. Then the value of β is close to (The gas constant, $R = 8.31$ J/K/mol)
- (1) 7.5×10^{-2} Pa.m⁶ (2) 1.5×10^2 Pa.m⁶
(3) 3×10^{-2} Pa.m⁶ (4) 2.2×10^1 Pa.m⁶
33. A heater supplying constant power P watts is switched on at time $t = 0$ minutes to raise the temperature of a liquid kept in a calorimeter of negligible heat capacity. A student records the temperature of the liquid $T(t)$ at equal time intervals. A graph is plotted with $T(t)$ on the y-axis versus t on the x-axis. Assume that there is no heat loss the surroundings during heating. Then,
- (1) the graph is a straight line parallel to the time axis.
(2) the heat capacity of the liquid is inversely proportional to the slope of the graph
(3) if some heat were lost at a constant rate of the surroundings during heating, the graph would be a straight line but with a larger slope
(4) the internal energy of the liquid increases quadratically with time.

Space For Rough Work

34. Unpolarised red light is incident on the surface of a lake at incident angle θ_R . An observer seeing the light reflected from the water surface through a polarizer notices that on rotating the polarizer, the intensity of light drops to zero at a certain orientation. The red light is replaced by unpolarised blue light. The observer sees the same effect with reflected blue light at incident angle θ_B . Then,

- (1) $\theta_B < \theta_R < 45^\circ$ (2) $\theta_B = \theta_R$
 (3) $\theta_B > \theta_R > 45^\circ$ (4) $\theta_R > \theta_B > 45^\circ$

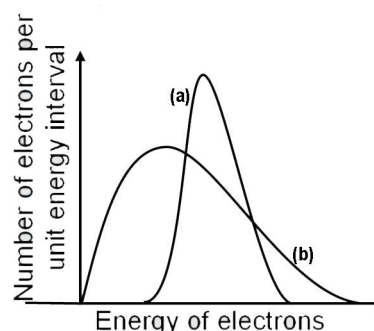
35. A neutral spherical copper particle has a radius of 10 nm ($1 \text{ nm} = 10^{-9} \text{ m}$). It gets charged by applying the voltage slowly adding one electron at a time. Then the graph of the total charge on the particle vs the applied voltage would look like :



36. A charge $+q$ is distributed over a thin ring of radius r with line charge density $\lambda = q \sin^2 \theta / (\pi r)$. Note that the ring is in the x - y plane and θ is the angle made by \vec{r} with the x -axis. The work done by the electric force in displacing a point charge $+Q$ from the center of the ring to infinity is

- (1) equal to $qQ/2\pi\epsilon_0 r$
 (2) equal to $qQ/4\pi\epsilon_0 r$
 (3) equal to zero only if the path is a straight line perpendicular to the plane of the ring.
 (4) equal to $qQ/8\pi\epsilon_0 r$

37. Originally the radioactive beta decay was thought as a decay of a nucleus with the emission of electrons only (case I). However, in addition to be electron, another (nearly) massless and electrically neutral particle is also emitted (Case II). Based on the figure below, which of the following is correct :

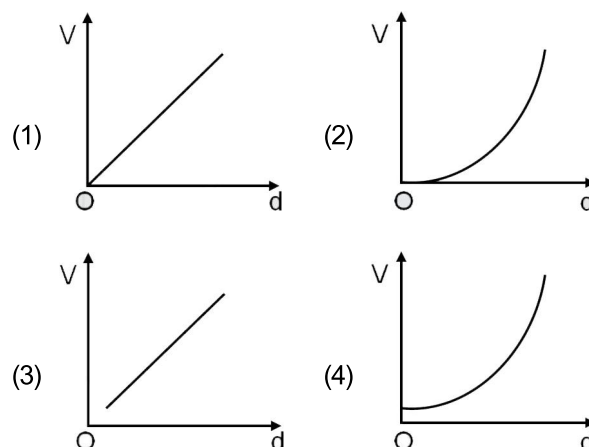


- (1) (a) in both cases I and II
 (2) (a) in case I and (b) in case II
 (3) (a) in case II and (b) in case I
 (4) (b) in both cases I and II

38. One gram-mole of an ideal gas A with the ratio of constant pressure and constant volume specific heats, $\gamma_A = 5/3$ is mixed with n gram-moles of another ideal gas B with $\gamma_B = 7/5$. If the γ for the mixture is $19/13$ what will be the value of n ?

- (1) 0.75 (2) 2 (3) 1 (4) 3

39. How will the voltage (V) between the two plates of a parallel plate capacitor depend on the distance (d) between the plates, if the charge on the capacitor remains the same ?



Space For Rough Work




40. Three large identical plates are kept close and parallel to each other. The outer two plates are maintained at temperature T and $2T$, respectively. The temperature of the middle plate in steady state will be close to

- (1) $1.1T$ (2) $1.3T$
 (3) $1.7T$ (4) $1.9T$

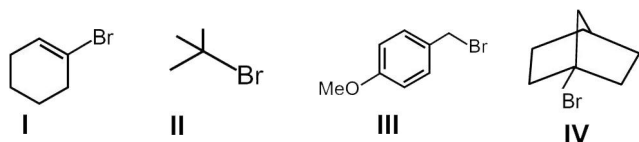
CHEMISTRY

41. The major products of the following reaction



- (1) $\text{Br}_3\text{C}-\text{OH}$ and Ph 
 (2) Ph  and CHBr_3
 (3) Ph  and NaBr
 (4) PhH and $\text{CBr}_3\text{CO}_2\text{Na}$

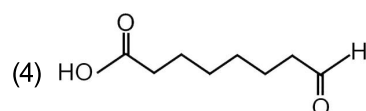
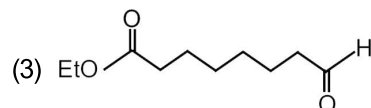
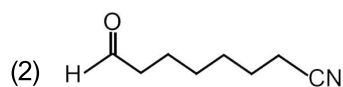
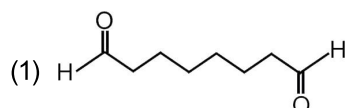
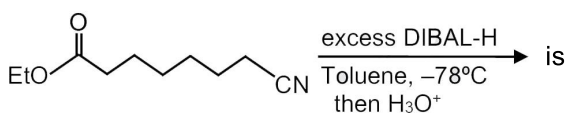
42. Among the following,



the compounds which can undergo an $\text{S}_{\text{N}}1$ reaction in an aqueous solution, are

- (1) I and IV only (2) II and IV only
 (3) II and III only (4) II, III and IV only

43. The major product of the following reaction



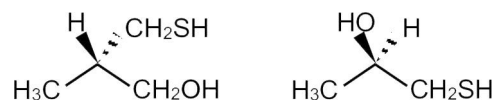
44. Permanent hardness of water can be removed by

- (1) heating
 (2) treating with sodium acetate ($\text{CH}_3\text{CO}_2\text{Na}$)
 (3) treating with $\text{Ca}(\text{HCO}_3)_2$
 (4) treatment with sodium hexametaphosphate ($\text{Na}_6\text{P}_6\text{O}_{18}$)

45. Alkali metals (M) dissolved in liquid NH_3 to give

- (1) MNH_2
 (2) MH
 (3) $[\text{M}(\text{NH}_3)_x]^+ + [\text{e}(\text{NH}_3)_y]^-$
 (4) M_3N

46. The absolute configurations of the following compounds



respectively, are

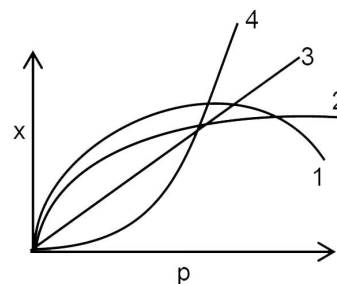
- (1) R and R (2) S and S
 (3) R and S (4) S and R

47. The diamagnetic species among the following is

- (1) O_2^+ (2) O_2^-
 (3) O_2 (4) O_2^{2-}

Space For Rough Work

- 48.** Among the following transformation, the hybridization of the central atom remain unchanged in
- (1) $\text{CO}_2 \rightarrow \text{HCOOH}$ (2) $\text{BF}_3 \rightarrow \text{BF}_4^-$
 (3) $\text{NH}_3 \rightarrow \text{NH}_4^+$ (4) $\text{PCl}_3 \rightarrow \text{PCl}_5$
- 49.** For an octahedral complex MX_4Y_2 (M = a transition metal, X and Y are monodentate achiral ligands), the correct statement, among the following, is
- (1) MX_4Y_2 has 2 geometrical isomers one of which is chiral
 (2) MX_4Y_2 has 2 geometrical isomers both of which is achiral
 (3) MX_4Y_2 has 4 geometrical isomers all of which is achiral
 (4) MX_4Y_2 has 4 geometrical isomers two of which is chiral
- 50.** The value of the Henry's law constant of Ar, CO_2 , CH_4 , and O_2 in water at 25°C are 40.30, 1.67, 0.41 and 34.86 kbar, respectively. The order of their solubility in water at the same temperature and pressure is
- (1) $\text{Ar} > \text{O}_2 > \text{CO}_2 > \text{CH}_4$ (2) $\text{CH}_4 > \text{CO}_2 > \text{Ar} > \text{O}_2$
 (3) $\text{CH}_4 > \text{CO}_2 > \text{O}_2 > \text{Ar}$ (4) $\text{Ar} > \text{CH}_4 > \text{O}_2 > \text{CO}_2$
- 51.** Thermal decomposition of N_2O_5 occurs as per the equation below
- $$2\text{N}_2\text{O}_5 \rightarrow 4\text{NO}_2 + \text{O}_2$$
- The correct statement is
- (1) O_2 production rate is four times the NO_2 production rate
 (2) O_2 production rate is the same as the rate of disappearance of N_2O_5
 (3) rate of disappearance of N_2O_5 is one-fourth of NO_2 production rate
 (4) rate of disappearance of N_2O_5 is twice the O_2 production rate
- 52.** For a 1st order chemical reaction
- (1) the product formation rate is independent of reactant concentration
 (2) the times taken for the completion of half of the reaction ($t_{1/2}$) is 69.3% of the rate constant (k)
 (3) the dimension of Arrhenius pre-exponential factor is reciprocal of time
 (4) the concentration vs time plot for the reactant should be linear with a negative slope
- 53.** The boiling point of 0.001 M aqueous solution of NaCl, Na_2SO_4 , K_3PO_4 and CH_3COOH should follow the order
- (1) $\text{CH}_3\text{COOH} < \text{NaCl} < \text{Na}_2\text{SO}_4 < \text{K}_3\text{PO}_4$
 (2) $\text{NaCl} < \text{Na}_2\text{SO}_4 < \text{K}_3\text{PO}_4 < \text{CH}_3\text{COOH}$
 (3) $\text{CH}_3\text{COOH} < \text{K}_3\text{PO}_4 < \text{Na}_2\text{SO}_4 < \text{NaCl}$
 (4) $\text{CH}_3\text{COOH} < \text{K}_3\text{PO}_4 < \text{NaCl} < \text{Na}_2\text{SO}_4$
- 54.** An allotrope of carbon which exhibits only two types of C-C bond distance of 143.5 pm and 138.3 pm, is
- (1) Charcoal (2) graphite
 (3) diamond (4) fullerene
- 55.** Nylon-2 nylon-6 is co-polymer of 6-aminohexanoic acid and
- (1) glycine (2) Valine
 (3) alanine (4) leucine
- 56.** A solid is hard and brittle. It is an insulator in solid state but conducts electricity in molten state. The solid is a
- (1) molecular solid (2) ionic solid
 (3) metallic solid (4) covalent solid
- 57.** The curve that best describes the adsorption of a gas (X g) on 1.0 g of a solid substrate as a function of pressure (p) at a fixed temperature is
- (1) 1
 (2) 2
 (3) 3
 (4) 4



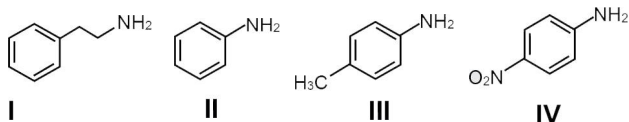
Space For Rough Work

58. The octahedral complex $\text{CoSO}_4\text{Cl}\cdot 5\text{NH}_3$ exists in two isomeric forms X and Y. Isomer X reacts AgNO_3 to give a white precipitate, but does not react with BaCl_2 . Isomer Y gives white precipitate with BaCl_2 but does not react with AgNO_3 .

Isomers X and Y are

- (1) Ionization isomers (2) Linkage isomers
(3) Coordination isomers (4) Solvent isomers

59. The correct order of basicity of the following amines



- (1) I > II > III > IV (2) I > III > II > IV
(3) III > II > I > IV (4) IV > III > II > I
60. Electrolysis of a concentrated aqueous solution of NaCl results in

- (1) Increases in pH of the solution
(2) Decreases in pH of the solution
(3) O_2 liberation at the cathode
(4) H_2 liberation at the anode

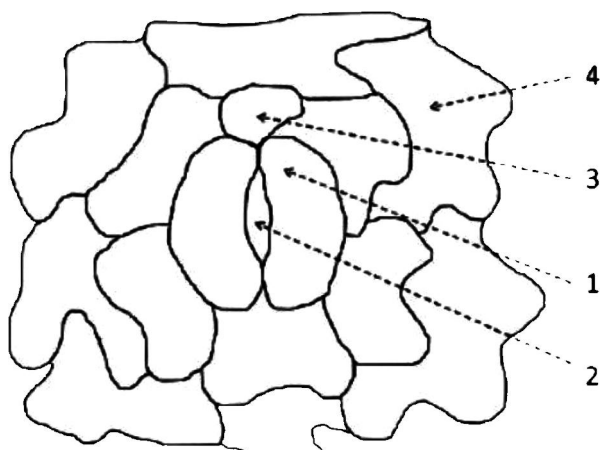
BIOLOGY

61. Ethanol is used to treat methanol toxicity because ethanol

- (1) Is a competitive inhibitor of alcohol dehydrogenase
(2) Is a non-competitive inhibitor of alcohol dehydrogenase
(3) Activates enzymes involved in methanol metabolism.
(4) Inhibits methanol uptake by cells

62. Given below is a diagram of the stomatal apparatus.

Match the labels with the corresponding names of the components. Choose the CORRECT combination



- (1) 1-Stomatal pore; 2- Guard cell; 3- Epidermal cell ;
4- subsidiary cell
(2) 1-Guard cell; 2- Stomatal pore; 3- Subsidiary cell;
4- Epidermal cell
(3) 1-Subsidiary cell; 2- Guard cell; 3- Stomatal pore;
4- Epidermal cell
(4) 1-Guard cell; 2- Stomatal pore; 3- Epidermal cell ;
4- subsidiary cell

63. Which one of the following pairs was excluded from Whittaker's five kingdom classification ?

- (1) Viruses and lichens (2) Algae and euglena
(3) Lichens and algae (4) Euglena and viruses

64. A plant species when grown in shade tends to produce thinner leaves with more surface area and when grown under abundant sunlight starts producing thicker leaves with reduced surface area. This phenomenon is an example of

- (1) Character displacement
(2) Phenotypic plasticity
(3) Natural selection
(4) Genotypic variation

Space For Rough Work

- 65.** Sacred groves found in several regions in India are an example of
 (1) In situ conservation (2) ex situ conservation
 (3) Reintroduction (4) Restoration
- 66.** Which one of the following immune processes is most effectively controlled by anti-histamines?
 (1) Cell-mediated autoimmunity
 (2) IgE-mediated exaggerated immune response
 (3) IgG-mediated humoral immune response
 (4) IgM-mediated humoral immune response
- 67.** Which one of the following is explained by the endosymbiotic theory?
 (1) The interaction between bacteria and viruses
 (2) The symbiosis between plant and animals
 (3) The origin of mitochondria and chloroplast
 (4) The evolution of multicellular organism from unicellular ones
- 68.** According to the logistic population growth model, the growth rate is independent of
 (1) per capita birth rate (2) per capita death rate
 (3) resource availability (4) environmental fluctuation
- 69.** A violent volcanic eruption wiped out most of the life forms in an island over time, different forms of simple organisms colonised this region. Following by the emergence of other organisms such as shrubs, woody plants, invertebrates and mammals. This ecological process is referred to as
 (1) generation (2) replacement
 (3) succession (4) turnover
- 70.** Which one of the following microbial products is called "clot buster"
 (1) Cyclosporin A (2) Paracetamol
 (3) Statins (4) Streptokinase
- 71.** Which one of the following elements is NOT directly involved in transcription?
 (1) Promoter (2) Terminator
 (3) Enhancer (4) OriC
- 72.** Which one of the following phyla is a pseudocoelomate?
 (1) Cnidaria (2) Nematode
 (3) Mollusca (4) Chordate
- 73.** Which one of the following glands does NOT secrete saliva?
 (1) Submaxillary gland (2) Lacrimal gland
 (3) Parotid gland (4) Sublingual gland
- 74.** Which one of the following options correctly represents the tissue arrangement in roots?
 (1) Cortex, pericycle, casparian strip, vascular bundle
 (2) Pericycle, cortex, casparian strip, vascular bundle
 (3) Cortex, casparian strip, pericycle, vascular bundle
 (4) Casparian strip, pericycle, cortex, vascular bundle
- 75.** During fermentation of glucose to ethanol, glucose is
 (1) first reduced and then oxidised
 (2) Only oxidised
 (3) neither oxidised nor reduced
 (4) only reduced
- 76.** Which of the following is/are the product(s) of cyclic photophosphorylation?
 (1) Both NADPH and H^+ (2) NADPH
 (3) ATP (4) Both ATP and NADPH
- 77.** Which one of the following amino acids is least likely to be in the core of a protein?
 (1) Phenylalanine (2) Valine
 (3) Isoleucine (4) Arginine
- 78.** Which one of the following statements is a general feature of global species diversity?
 (1) It increases from high to low latitudes
 (2) It increases from low to high latitudes
 (3) It changes over time but not spatially
 (4) It changes randomly across space and time

79. Which one of the following conditions is NOT responsible for the presence of deoxygenated blood in the arteries of a new born?
- (1) Pneunnonia
 - (2) Atrial septal defect
 - (3) Shunt between pulmonary artery and aorta
 - (4) Phenylketonuris
80. Rhizobium forms symbiotic association with roots in legunnes and fixes atmospheric nitrogen. Which one of the following statement is CORRECT about this process?
- (1) Activity of nitrogenase is sensitive to oxygen
 - (2) Activity of nitrogenase is insensitive to oxygen
 - (3) Anaerobic conditions allow ATP independent conversion of nitrogen to ammonia
 - (4) Under aerobic conditions, atmospheric nitrogen can be converted to nitrates by Rhizobium

PART-II

Two Mark Questions

MATHEMATICS

81. The points C and D on a semicircle with AB as diameter are such that $AC = 1$, $CD = 2$, and $DB = 3$. Then the length of AB lies in the interval
- (1) [4,4.1)
 - (2) [4.1,4.2)
 - (3) [4.2,4.3)
 - (4) [4.3, ∞)
82. Let ABC be a triangle and let D be the midpoint of BC. Suppose $\cot(\angle CAD) : \cot(\angle BAD) = 2 : 1$. If G is the centroid of triangle ABC, then the measure of $\angle BGA$ is
- (1) 90°
 - (2) 105°
 - (3) 120°
 - (4) 135°
83. Let $f(x) = x^6 - 2x^5 + x^3 + x^2 - x - 1$ and $g(x) = x^4 - x^3 - x^2 - 1$ be two polynomials. Let a,b,c and d be the roots of $g(x) = 0$. Then the value of $f(a) + f(b) + f(c) + f(d)$ is
- (1) -5
 - (2) 0
 - (3) 4
 - (4) 5
84. Let $\vec{a} = \hat{i} + \hat{j} + \hat{k}$, $\vec{b} = 2\hat{i} + 2\hat{j} + \hat{k}$ and $\vec{c} = 5\hat{i} + \hat{j} - \hat{k}$ be the three vectors. The area of the region formed by the set of points whose position vectors \vec{r} satisfy the equations $\vec{r} \cdot \vec{a} = 5$ and $|\vec{r} - \vec{b}| + |\vec{r} - \vec{c}| = 4$ is closest to the integer
- (1) 4
 - (2) 9
 - (3) 14
 - (4) 19
85. The number of solutions to $\sin(\pi \sin^2(\theta)) + \sin(\pi \cos^2(\theta)) = 2 \cos\left(\frac{\pi}{2} \cos(\theta)\right)$ satisfying $0 \leq \theta \leq 2\pi$ is
- (1) 1
 - (2) 2
 - (3) 4
 - (4) 7
86. Let $J = \int_0^1 \frac{x}{1+x^8} dx$. Consider the following assertions :
- I. $J > \frac{1}{4}$
 - II. $J < \frac{\pi}{8}$
- Then
- (1) only I is true
 - (2) only II is true
 - (3) both I and II are true
 - (4) neither I nor II is true
87. Let $f : (-1, 1) \rightarrow \mathbb{R}$ be a differentiable function satisfying $(f'(x))^4 = 16(f(x))^2$ for all $x \in (-1, 1)$, $f(0) = 0$. The number of such functions is
- (1) 2
 - (2) 3
 - (3) 4
 - (4) more than 4

88. For $x \in \mathbb{R}$, let $f(x) = |\sin x|$ and $g(x) = \int_0^x f(t) dt$. Let

$$p(x) = g(x) - \frac{2}{\pi}x. \text{ Then}$$

- (1) $p(x + \pi) = p(x)$ for all x
- (2) $p(x + \pi) \neq p(x)$ for at least one but finitely many x
- (3) $p(x + \pi) \neq p(x)$ for infinitely many x
- (4) p is a one-one function

89. Let A be the set of vectors $\vec{a} = (a_1, a_2, a_3)$ satisfying

$$\left(\sum_{i=1}^3 \frac{a_i}{2^i} \right)^2 = \sum_{i=1}^3 \frac{a_i^2}{2^i}. \text{ Then}$$

- (1) A is empty
- (2) A contains exactly one element
- (3) A has 6 elements
- (4) A has infinitely many elements

90. Let $f : [0, 1] \rightarrow [0, 1]$ be a continuous function such that

$$x^2 + (f(x))^2 \leq 1 \text{ for all } x \in [0, 1] \text{ and } \int_0^1 f(x) dx = \frac{\pi}{4}$$

$$\text{Then } \int_{\frac{1}{2}}^{\frac{1}{\sqrt{2}}} \frac{f(x)}{1-x^2} dx \text{ equals}$$

- (1) $\frac{\pi}{12}$
- (2) $\frac{\pi}{15}$
- (3) $\frac{\sqrt{2}-1}{2}\pi$
- (4) $\frac{\pi}{10}$

PHYSICS

91. A metal rod of cross-sectional area 10^{-4} m^2 is hanging in a chamber kept at 20°C with a weight attached to its free end. The coefficient of thermal expansion of the rod is $2.5 \times 10^{-6} \text{ K}^{-1}$ and its Young's modulus is $4 \times 10^{12} \text{ N/m}^2$. When the temperature of the chamber is lowered to T then a weight of 5000 N needs to be attached to the rod so that its length is unchanged. Then T is

- | | |
|------------------------|------------------------|
| (1) 15°C | (2) 12°C |
| (3) 5°C | (4) 0°C |

92. A short solenoid (length ℓ and radius r , with n turns per unit length) lies well inside and on the axis of a very long, coaxial solenoid (length L , radius R and N turns per unit length, with $R > r$). Current I flows in the short solenoid. Choose the correct statement:

- (1) There is uniform magnetic field $\mu_0 n I$ in the long solenoid.

(2) Mutual inductance of the solenoids is $\pi \mu_0 r^2 n N \ell$.

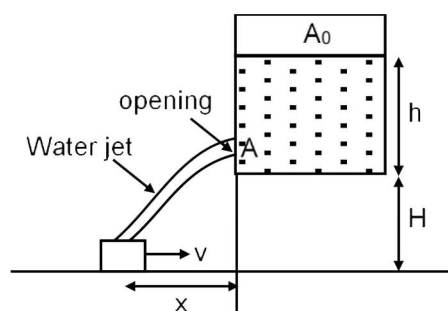
(3) Flux through outer solenoid due to current I in the inner solenoid is proportional to the ratio R/r

(4) Mutual inductance of the solenoids is $\pi \mu_0 r R n N \ell L / (rR)^{1/2}$

93. Consider the wall of a dam to be straight with height H and length L . It holds a lake of water of height h ($h < H$) on one side. Let the density of water be ρ_w . Denote the torque about the axis along the bottom length of the wall by τ_1 . Denote also as similar torque due to the water up to height $h/2$ and wall length $L/2$ by τ_2 . Then τ_1/τ_2 (ignore atmospheric pressure) is

- | | |
|-------|--------|
| (1) 2 | (2) 4 |
| (3) 8 | (4) 16 |

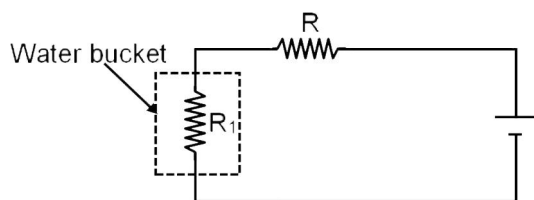
94. Two containers C1 and C2 of volumes V and $4V$ respectively hold the same ideal gas and are connected by a thin horizontal tube of negligible volume with a valve which is initially closed. The initial pressures of the gas in C1 and C2 are P and $5P$, respectively. Heat baths are employed to maintain the temperatures in the containers at 300 K and 400 K respectively. The valve is now opened. Select the correct statement :
- (1) The gas will flow from the hot container to the cold one and the process is reversible.
 - (2) The gas will flow from one container to the other till the number of moles in two containers are equal
 - (3) A long time after the valve is opened, the pressure in both the containers will be $3P$
 - (4) A long time after the valve is opened, number of moles of gas in the hot container will be thrice that of the cold one.
95. Four electrons, each of mass m_e are in a one dimensional box of size L . Assume that the electrons are noninteracting, obey the Pauli exclusion principle and are described by standing de Broglie waves confined within the box. Define $\alpha = h^2/8m_eL^2$ and U_0 to be the ground state energy. Then
- (1) The energy of the highest occupied state is 16α
 - (2) $U_0 = 30\alpha$
 - (3) The total energy of the first excited state is $U_0 + 9\alpha$
 - (4) The total energy of the second excited state is $U_0 + 8\alpha$
96. A rope of length L and uniform linear density is hanging from the ceiling. A transverse wave pulse, generated close to the free end of the rope, travels upwards through the rope. Select the correct option
- (1) The speed of the pulse decreases as it moves up
 - (2) The time taken by the pulse to travel the length of the rope is proportional to \sqrt{L}
 - (3) The tension will be constant along the length of the rope.
 - (4) The speed of the pulse will be constant along the length of the rope
97. A circuit consists of a coil with inductance L and an uncharged capacitor of capacitance C . The coil is in a constant uniform magnetic field such that the flux through the coil is Φ . At time $t = 0$, the magnetic field is abruptly switched off. Let $\omega_0 = \frac{1}{\sqrt{LC}}$ and ignore the resistance of the circuit. Then,
- (1) Current in the circuit is $I(t) = (\Phi/L) \cos \omega_0 t$
 - (2) magnitude of the charge on the capacitor is $|Q(t)| = 2C\omega_0 |\sin \omega_0 t|$
 - (3) initial current in the circuit is infinite
 - (4) initial charge on the capacitor is $C\omega_0 \Phi$
98. Consider the configuration of a stationary water tank of cross section area A_0 , and a small bucket as shown in figure.



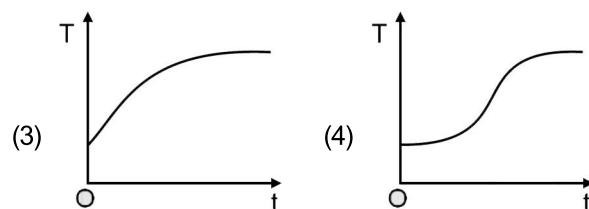
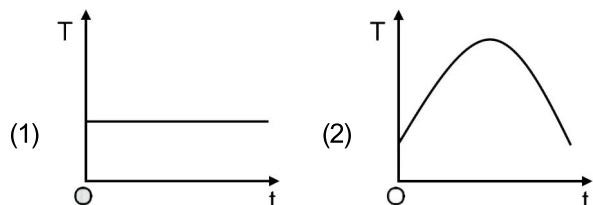
What should be the speed, v , of the bucket so that the water leaking out of a hole of cross-sectional area A (as shown) from the water tank does not fall outside the bucket? Take $h = 5\text{ m}$, $H = 5\text{ m}$, $g = 10\text{ m/s}^2$, $A = 5\text{ cm}^2$ and $A_0 = 500\text{ cm}^2$

- (1) 1 m/s
- (2) 0.5 m/s
- (3) 0.1 m/s
- (4) 0.05 m/s

99. The circuit below is used to heat water kept in a bucket.



Assume heat loss only by Newton's law of cooling, the variation in the temperature of the water in the bucket as a function of time is depicted by :



100. A bubble of radius R in water of density ρ is expanding uniformly at speed v . Given that water is incompressible, the kinetic energy of water being pushed is :

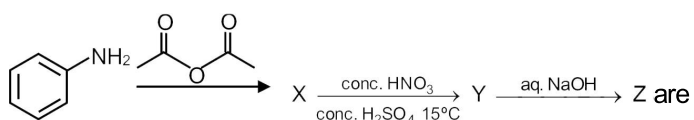
- (1) Zero (2) $2\pi\rho R^3v^2$
 (3) $2\pi\rho R^3v^2/3$ (4) $4\pi\rho R^3v^2/3$

CHEMISTRY

101. The product of which of the following reactions forms a reddish brown precipitate when subjected to Fehling's test ?

- (1) $\xrightarrow[\text{anh. AlCl}_3, \text{CuCl}]{\text{CO, HCl}}$
- (2) + $(\text{CH}_3\text{CH}_2)_2\text{Cd} \longrightarrow$
- (3) $\xrightarrow[2. \text{H}_2, \text{Pd-BaSO}_4]{1. \text{PCl}_5}$
- (4) $\xrightarrow[2. \text{Zn/H}_2\text{O}]{1. \text{O}_3}$

102. The major products X, Y and Z in the following sequence of transformations

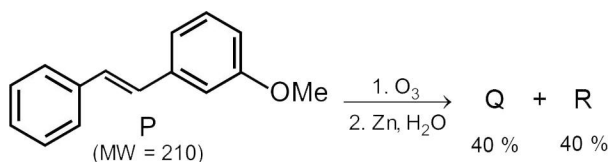


- (1) X = Y =
 Z =

- (2) X = Y =
 Z =
- (3) X = Y =
 Z =
- (4) X = Y =
 Z =

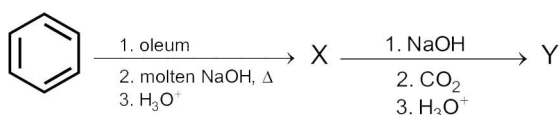
Space For Rough Work

103. In the following reaction, P gives two products Q and R, each in 40% yield.



If the reaction is carried out with 420 mg of P, the reaction yields 108.8 mg of Q. The amount of R produced in the reaction is closest to

- (1) 97.6 mg (2) 108.8 mg
 (3) 84.8 mg (4) 121.6 mg
104. Solubility products of CuI and Ag_2CrO_4 have almost the same value ($\sim 4 \times 10^{-12}$). The ratio of solubilities of the two salts ($\text{CuI} : \text{Ag}_2\text{CrO}_4$) is closest to
- (1) 0.01 (2) 0.02
 (3) 0.03 (4) 0.10
105. Given that the molar combustion enthalpy of benzene, cyclohexane, and hydrogen are x , y and z , respectively, the molar enthalpy of hydrogenation of benzene to cyclohexane is
- (1) $x - y + z$ (2) $x - y + 3z$
 (3) $y - x + z$ (4) $y - x + 3z$
106. Among the following, the pair of paramagnetic complexes is
- (1) $\text{K}_3[\text{Fe}(\text{CN})_6]$ and $\text{K}_3[\text{CoF}_6]$
 (2) $\text{K}_3[\text{Fe}(\text{CN})_6]$ and $[\text{Co}(\text{NH}_3)_6]\text{Cl}_3$
 (3) $\text{K}_4[\text{Fe}(\text{CN})_6]$ and $\text{K}_3[\text{CoF}_6]$
 (4) $\text{K}_4[\text{Fe}(\text{CN})_6]$ and $[\text{Co}(\text{NH}_3)_6]\text{Cl}_3$
107. The major products X and Y in the following sequence of transformations



- (1) X = Y =
- (2) X = Y =
- (3) X = Y =
- (4) X = Y =

108. 3.0 g of oxalic acid $[(\text{CO}_2\text{H})_2 \cdot 2\text{H}_2\text{O}]$ is dissolved in a solvent to prepare a 250 mL solution. The density of the solution is 1.9 g/mL. The molality and normality of the solution. Respectively, are closest to

- (1) 0.10 and 0.38 (2) 0.10 and 0.19
 (3) 0.05 and 0.19 (4) 0.05 and 0.09

109. In a titration experiment, 10 mL of an FeCl_2 solution consumed 25 mL of a standard $\text{K}_2\text{Cr}_2\text{O}_7$ solution to reach the equivalent point. The standard $\text{K}_2\text{Cr}_2\text{O}_7$ solution is prepared by dissolving 1.225 g of $\text{K}_2\text{Cr}_2\text{O}_7$ in 250 mL water. The concentration of the FeCl_2 solution is closest to

[Given : molecular weight of $\text{K}_2\text{Cr}_2\text{O}_7 = 294 \text{ g mol}^{-1}$]

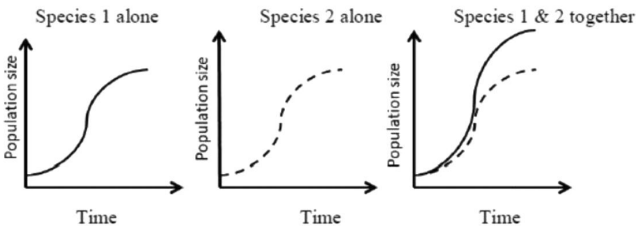
- (1) 0.25 N (2) 0.50 N
 (3) 0.10 N (4) 0.04 N

110. Atoms of an element Z form hexagonal closed pack (hcp) lattice and atoms of element X occupy all the tetrahedral voids. The formula of the compound is

- (1) XZ
 (2) XZ_2
 (3) X_2Z
 (4) X_4Z_3

Space For Rough Work

BIOLOGY

- 111.** In a population N_{AA} and N_{aa} are the number of homozygous individuals of allele 'A' and 'a', respectively, and N_{Aa} is the number of heterozygous individuals. Which one of the following options is the allele frequency of 'A' and 'a' in a population with $N_{AA} = 90$, $N_{Aa} = 40$ and $N_{aa} = 70$?
- (1) $A = 0.55$ and $a = 4.5$
 - (2) $A = 0.40$ and $a = 0.60$
 - (3) $A = 0.35$ and $a = 0.65$
 - (4) $A = 0.25$ and $a = 0.75$
- 112.** A newly discovered organism possesses a genetic material with a new base composition consisting of the sugar and phosphate backbone as found in existing natural DNA. The five novel bases in this genetic material—namely, P, Q, R, S, T – are heterocyclic structures with 1, 1, 2, 2 and 3 rings, respectively. Assuming the new DNA forms a double helix of uniform width, which one of the following would be the most appropriate base pairing?
- (1) P with Q: R with T: S with T
 - (2) P with T: R with S: Q with T
 - (3) P with S: Q with R: S with T
 - (4) P with Q: R with S: S with T
- 113.** Amino acid analysis of two globular protein samples yielded identical composition per mole. Which one of the following characteristics is necessarily identical for the two proteins?
- (1) Disulphide bonds
 - (2) Primary structure
 - (3) Molecular mass
 - (4) Three-dimensional structure
- 114.** Which of the following conversions in glycolysis is an example of substrate level phosphorylation?
- (1) Glyceraldehyde-3-phosphate to 1,3-bisphosphoglycerate
 - (2) 1,3-bisphosphoglycerate to 3-phosphoglycerate
 - (3) Fructose 6-phosphate to fructose-1,6-bisphosphate
 - (4) Glucose-6-phosphate to fructose-6-phosphate
- 115.** A plant heterozygous for height and flower colour (TtRr) are selfed and 1600 of the resulting seeds are planted. If the distance between the loci controlling height and flower colour is 1 centimorgan, then how many offspring are expected to be short with white flower (ttrr)?
- (1) 1
 - (2) 10
 - (3) 100
 - (4) 400
- 116.** Which one of the following will be the ratio of heavy, intermediate and light bands in Meselson and Stahl's experiment after two generations if DNA replication were conservative?
- (1) 0 : 2 : 2
 - (2) 1 : 0 : 3
 - (3) 2 : 2 : 0
 - (4) 2 : 2 : 0
- 117.** Given the graph below, the interaction between species 1 and 2 can be classified as
- 
- (1) amensalism
 - (2) commensalism
 - (3) mutualism
 - (4) competition
- 118.** The additional nuclear ploidy levels found in a diploid angiosperm species in full bloom compared to its vegetative state are
- (1) 1N & 2N
 - (2) 2N & 3N
 - (3) 3N & 4N
 - (4) 1N & 3N

Space For Rough Work

- 119.** The bill sizes in a bird species of seed crackers from West Africa shows a bimodal distribution. Their most abundant food sources are two types of marsh plants that produce hard and soft seeds, consumed preferentially by the large and small billed birds respectively. This bimodal distribution of bill sizes is a likely consequence of
- (1) directional selection
 - (2) stabilizing selection
 - (3) disruptive selection
 - (4) sexual selection
- 120.** The containers X and Y have 1 litre of pure water and 1 litre of 0.1 M sugar solution, respectively. Which one of the following statements would be CORRECT regarding their water potential (ψ) and osmotic potential (ψ_s)?
- (1) Both ψ and ψ_s are zero in X
 - (2) Both ψ and ψ_s are zero in Y
 - (3) ψ in X is zero and ψ_s in Y is negative
 - (4) ψ in X is negative and ψ_s in Y is zero

Space For Rough Work

ANSWERS
KVPY-SB/SX_2019

1. (2)	16. (3)	31. (3)	46. (4)	61. (1)	76. (3)	91. (1)	106. (1)
2. (2)	17. (4)	32. (1)	47. (4)	62. (4)	77. (4)	92. (2)	107. (4)
3. (2)	18. (1)	33. (2)	48. (3)	63. (1)	78. (1)	93. (4)	108. (3)
4. (1)	19. (1)	34. (3)	49. (2)	64. (2)	79. (4)	94. (4)	109. (1)
5. (2)	20. (4)	35. (1)	50. (3)	65. (1)	80. (1)	95. (4)	110. (3)
6. (2)	21. (1)	36. (2)	51. (4)	66. (2)	81. (2)	96. (2)	111. (1)
7. (2)	22. (2)	37. (2)	52. (3)	67. (3)	82. (1)	97. (1)	112. (2)
8. (2)	23. (3)	38. (2)	53. (1)	68. (4)	83. (2)	98. (3)	113. (3)
9. (2)	24. (4)	39. (3)	54. (4)	69. (3)	84. (1)	99. (3)	114. (2)
10. (3)	25. (2)	40. (3)	55. (1)	70. (4)	85. (4)	100. (2)	115. (1)
11. (3)	26. (4)	41. (2)	56. (2)	71. (4)	86. (1)	101. (4)	116. (2)
12. (3)	27. (3)	42. (3)	57. (2)	72. (2)	87. (4)	102. (2)	117. (2)
13. (1)	28. (4)	43. (1)	58. (1)	73. (2)	88. (1)	103. (3)	118. (4)
14. (3)	29. (1)	44. (4)	59. (2)	74. (3)	89. (2)	104. (2)	119. (3)
15. (1)	30. (1)	45. (3)	60. (1)	75. (3)	90. (1)	105. (2)	120. (3)